

My Day 3 progress

Kindergarten Math - Week 16: Teen Numbers

Color one star after each practice page.



1



2



3



4



5



6



7



8



9



10

Great work today!

Keep going one small step at a time.



Kindergarten

Math

Week 16 - Day 3

Teen Numbers

Count, write, and represent numbers 11-20.

This book belongs to:

One day - 10 short practice pages



FreeTutorWorkbooks.com

1 Count. Write the number.







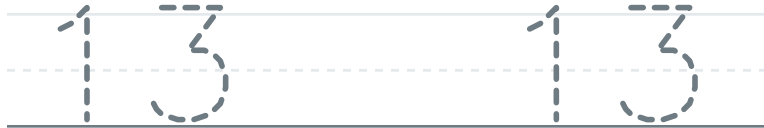
1 Count. Write the number.







2 Trace the number.



2 Trace the number.



3 Write the missing part.

$$10 + \boxed{} = 16$$

$$10 + \boxed{} = 17$$

3 Write the missing part.

$$10 + \boxed{} = 16$$

$$10 + \boxed{} = 17$$

1 Count. Write the number.







2 Trace the number.



3 Write the missing part.

$$10 + \boxed{} = 15$$

$$10 + \boxed{} = 16$$

1 Count. Write the number.







2 Trace the number.



3 Write the missing part.

$$10 + \boxed{} = 17$$

$$10 + \boxed{} = 18$$

1 Count. Write the number.



1 Count. Write the number.



2 Trace the number.



2 Trace the number.



3 Write the missing part.

$$10 + \boxed{} = 18$$

$$10 + \boxed{} = 19$$

3 Write the missing part.

$$10 + \boxed{} = 14$$

$$10 + \boxed{} = 15$$

1 Count. Write the number.



2 Trace the number.



3 Write the missing part.

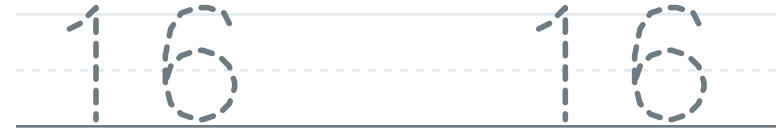
$$10 + \boxed{} = 13$$

$$10 + \boxed{} = 14$$

1 Count. Write the number.



2 Trace the number.



3 Write the missing part.

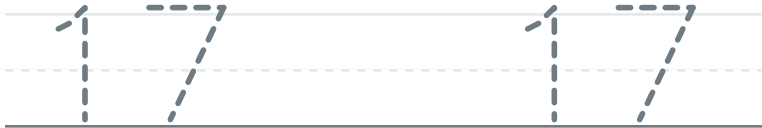
$$10 + \boxed{} = 19$$

$$10 + \boxed{} = 11$$

1 Count. Write the number.



2 Trace the number.



3 Write the missing part.

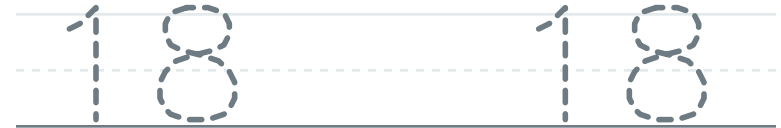
$$10 + \boxed{} = 11$$

$$10 + \boxed{} = 12$$

1 Count. Write the number.



2 Trace the number.



3 Write the missing part.

$$10 + \boxed{} = 12$$

$$10 + \boxed{} = 13$$