

# My Day 4 progress

Kindergarten Math - Week 14: Teen Numbers

Color one star after each practice page.



1



2



3



4



5



6



7



8



9



10

**Great work today!**

Keep going one small step at a time.



## Kindergarten

## Math

### Week 14 - Day 4

### Teen Numbers

Count, write, and represent numbers 11-20.

This book belongs to:

One day - 10 short practice pages



FreeTutorWorkbooks.com

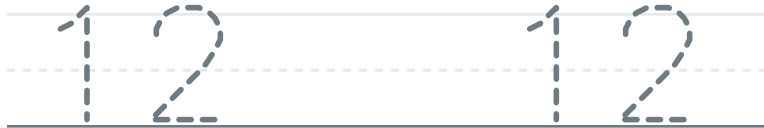
1 Count. Write the number.



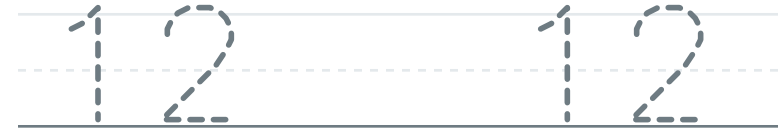
1 Count. Write the number.



2 Trace the number.



2 Trace the number.



3 Write the missing part.

$$10 + \boxed{\phantom{00}} = 15$$

$$10 + \boxed{\phantom{00}} = 16$$

3 Write the missing part.

$$10 + \boxed{\phantom{00}} = 15$$

$$10 + \boxed{\phantom{00}} = 16$$

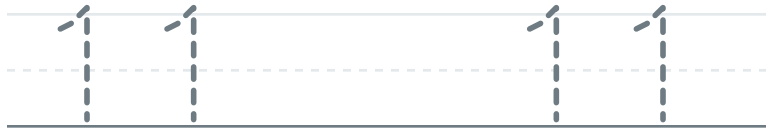
1 Count. Write the number.



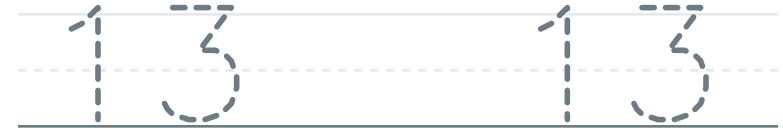
1 Count. Write the number.



2 Trace the number.



2 Trace the number.



3 Write the missing part.

$10 + \boxed{\phantom{00}} = 14$

$10 + \boxed{\phantom{00}} = 15$

3 Write the missing part.

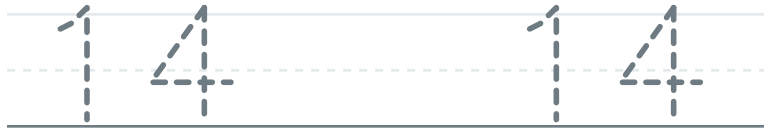
$10 + \boxed{\phantom{00}} = 16$

$10 + \boxed{\phantom{00}} = 17$

1 Count. Write the number.



2 Trace the number.



3 Write the missing part.

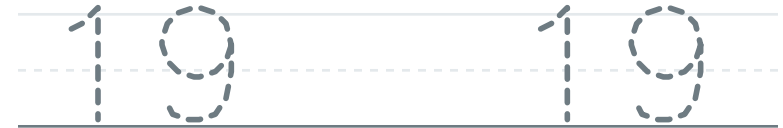
$$10 + \boxed{\phantom{00}} = 17$$

$$10 + \boxed{\phantom{00}} = 18$$

1 Count. Write the number.



2 Trace the number.



3 Write the missing part.

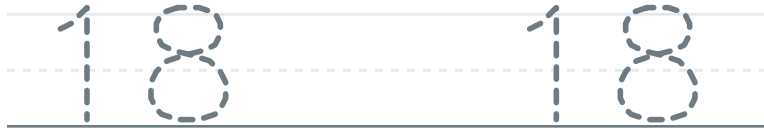
$$10 + \boxed{\phantom{00}} = 13$$

$$10 + \boxed{\phantom{00}} = 14$$

1 Count. Write the number.



2 Trace the number.



3 Write the missing part.

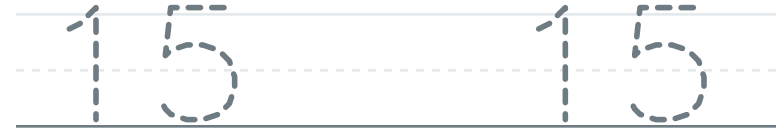
$$10 + \boxed{\phantom{00}} = 12$$

$$10 + \boxed{\phantom{00}} = 13$$

1 Count. Write the number.



2 Trace the number.



3 Write the missing part.

$$10 + \boxed{\phantom{00}} = 18$$

$$10 + \boxed{\phantom{00}} = 19$$

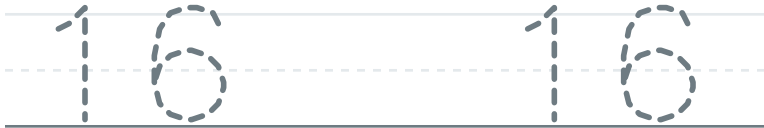
1 Count. Write the number.








2 Trace the number.



3 Write the missing part.

$$10 + \boxed{\phantom{00}} = 19$$

$$10 + \boxed{\phantom{00}} = 11$$

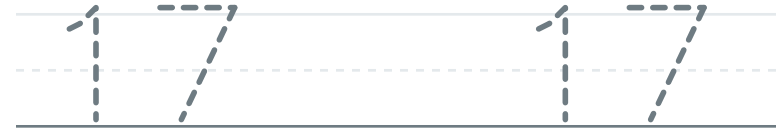
1 Count. Write the number.








2 Trace the number.



3 Write the missing part.

$$10 + \boxed{\phantom{00}} = 11$$

$$10 + \boxed{\phantom{00}} = 12$$